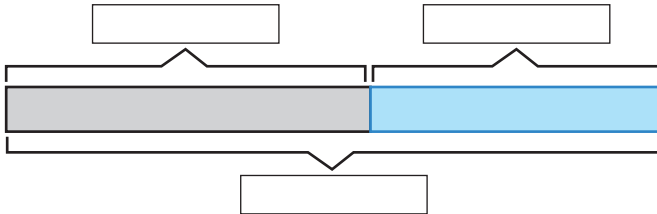




### Question 1

Every day Santa feeds his reindeer 53 carrots in the morning and 44 carrots in the afternoon. How many carrots does Santa feed his reindeer each day?

Label the bar model.



Complete the grid.

	T	U
○	<input type="text"/>	<input type="text"/>
<input type="text"/>	<input type="text"/>	<input type="text"/>
<input type="text"/>	<input type="text"/>	<input type="text"/>

Are you adding or subtracting?




The number sentence is  ○  =

Santa feeds the reindeer \_\_\_\_\_ carrots each day.

### Question 2

How tall is the snowman?

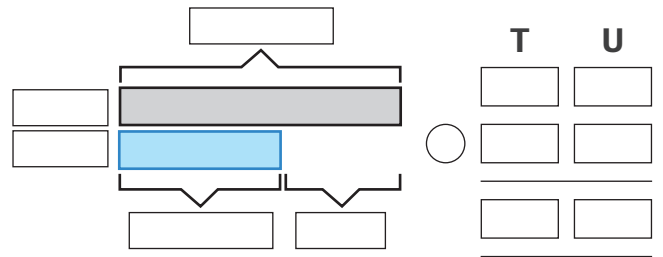


Fill in the spaces.

Beth builds a snowman. Beth is \_\_\_\_\_ cm tall.

The snowman is \_\_\_\_\_ cm \_\_\_\_\_ than Beth.

Write the names and numbers on to the model.

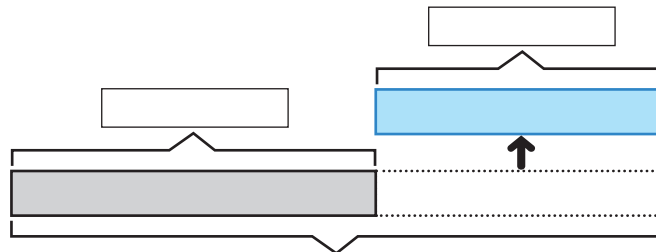


The number sentence is  ○  =

The snowman is \_\_\_\_\_ cm tall.

### Question 3

Look at the bar model.



Make a word problem/number story for this model using the group of gingerbread men shown below.



Now write the number sentence  ○  =

Ask the person next to you to solve your word problem. Have a go at making some more number problems.

